


Name:

Uhrzeit


Klasse:

1 Wie spät ist es? Schreibe jeweils beide Uhrzeiten auf.




_____ Uhr

_____ Uhr




_____ Uhr

_____ Uhr




_____ Uhr

_____ Uhr




_____ Uhr

_____ Uhr




_____ Uhr

_____ Uhr




_____ Uhr

_____ Uhr




_____ Uhr

_____ Uhr



_____ Uhr

_____ Uhr



_____ Uhr

_____ Uhr

Name:


Uhrzeit

Datum:

2


Schreibe zuerst die Uhrzeit auf. Überlegen dann, wie viel Zeit jeweils vergangen ist.

a




_____ Uhr
morgens

h min




_____ Uhr
morgens

b




_____ Uhr
nachmittags

h min




_____ Uhr
abends

c



_____ Uhr
morgens

h min




_____ Uhr
abends

Name:


Uhrzeit

Datum:

d




h min →




_____ Uhr
morgens

_____ Uhr
nachmittags

e




h min →




_____ Uhr
morgens

_____ Uhr
nachmittags

f




h min →




_____ Uhr
morgens

_____ Uhr
abends

g



h min →



_____ Uhr
morgens

_____ Uhr
morgens